

3RD GRADE SUMMER WORK

This is a great review of everything we have covered this year. We are requiring the first 30 lessons, but there is more if you so desire.

Name _____

The first part of the paper discusses the general theory of the firm, focusing on the role of the entrepreneur and the importance of capital structure. It is argued that the entrepreneur's personal characteristics, such as risk aversion and the desire for control, are crucial in determining the firm's capital structure. The paper then examines the implications of these findings for the theory of capital structure, suggesting that the traditional view of capital structure as a purely financial decision is incomplete.

The second part of the paper presents empirical evidence on the relationship between the entrepreneur's personal characteristics and the firm's capital structure. This is done through a series of regression analyses using data from a large sample of firms. The results show that firms with entrepreneurs who are more risk averse and have a stronger desire for control tend to have higher levels of debt. These findings are consistent with the theoretical predictions of the paper.

Finally, the paper discusses the policy implications of these findings. It suggests that policymakers should take into account the personal characteristics of entrepreneurs when designing financial regulations and policies. For example, providing more information and counseling to entrepreneurs about the risks and benefits of different capital structures could be a useful policy intervention.

The paper is organized as follows. Section 1 discusses the general theory of the firm and the role of the entrepreneur. Section 2 presents the empirical evidence on the relationship between the entrepreneur's personal characteristics and the firm's capital structure. Section 3 discusses the policy implications of these findings.

The author would like to thank the following people for their helpful comments: [names].

one hundred thirty-six

bulge [verb] Something **bulges** if it is so full that it sticks out a bit.

The word *bulge* is connected to suicase because...

Adverbs ending in -ly need the word **more** to compare them.

Write the comparative form of these adverbs:

angrily more angrily
sweetly _____

gargle salt water for your throat, sayed mom

gargle
sayed
throat

gentleness

[noun] You have **gentleness** if you are being calm and careful.

What meaning does this word have in your life?
My connection to the word:

Patterns with 2 and 4

- 2 x 1 = _____ 4 x 1 = _____
- 2 x 2 = _____ 4 x 2 = _____
- 2 x 3 = _____ 4 x 3 = _____
- 2 x 4 = _____ 4 x 4 = _____
- 2 x 5 = _____ 4 x 5 = _____

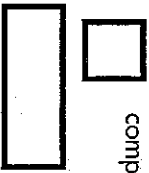
What patterns do you notice about the x2 and x4 facts?

Teague bought 10 flyswatters. He spent a total of \$20. If each swatter costs the same, how much does one fly swatter cost?

3 + 6 =
34 + 60 =
342 + 600 =

8 + 11 =
80 + 11 =
480 + 11 =

Use some of the words in the box to help compare the shapes.



sides angles
straight parallel

What's the same? What's different?

A number has 6 tens and 15 ones.
What is the number?

- 75
- 615
- 21

one hundred thirty-seven



Guess out the words with a different vowel sound than wasp.

out also wash thought mask
bought bald watch though
wand brought round chalk

Write the correct verb form for each pronoun.

When _____ they going?
was were
he always write like that?

Write something you might say to a guest. Use quotation marks.

Trace. Then write it twice.

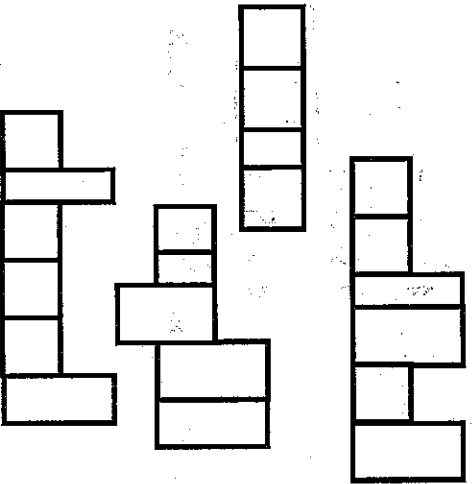
Answer

My sentence has:

- correct capitals correct punctuation best try at spelling makes sense

Sight Words

Write each word in the box it fits.
night warm almost walked



Open a book. Hunt for words to list in each box.

nouns

adjectives

COMMON

* Proper nouns need capitals!

PROPER

pronouns

describes nouns

verbs

adverbs

PAST

PRESENT


FUTURE

describes when, where, or how

Angus's magic wand is twice as long as Kala's wand.
Kala's wand is 20 centimeters long. How long is Angus's wand?

$$\begin{array}{r} 590 \\ - 75 \\ \hline \end{array}$$

$$\begin{array}{r} 870 \\ - 364 \\ \hline \end{array}$$



It's 4:15.
Sione wants to watch TV for 30 minutes.
When will he turn off the TV?

$$1 \text{ O } 1/2$$

$$\text{O} > \text{O} < \text{O} =$$



one hundred thirty-eight

pickiest: being the most fussy about liking things

Dad's pickiness means we can never eat out.

What's the shared base word of the underlined words?

The word **most** is needed to compare 3 or more things.

Write the superlative form of these adverbs:

happily _____
carefully _____

i said, Maliks cough drops is disgusting

Disgusting
Disgusting
Disgusting

He showed

gentleness with the

bird's nest when

he...



area: the measure of space inside a shape

Write the length and width of each rectangle. Multiply to find the area.




figure	length	width	area
A	_____ cm	_____ cm	_____ cm ²
B	_____ cm	_____ cm	_____ cm ²
C	_____ cm	_____ cm	_____ cm ²

At the candy store, there are 338 gumdrops. 160 are red and the rest are purple. How many gumdrops are purple?

$$6 \times 2 = \underline{\quad}$$

$$60 \times 2 = \underline{\quad}$$

$$3 \times 5 = \underline{\quad}$$

$$30 \times 5 = \underline{\quad}$$

$$9 \times 2 = \underline{\quad}$$

$$90 \times 2 = \underline{\quad}$$

Round to the nearest 100.

546 271

712 358

183 897

$$\square \times 4 = 36$$

o 40 o 12 o 9

one hundred thirty-nine



Write the word that best completes the sentence.

tear rip shred

Before you throw away the old credit card, make sure to _____ it in tiny pieces!


Write the missing quotation marks to fix the sentences.

I tried, Deval said, to do my best.

Have you worked hard? asked Mom.

Write a compound sentence about a guitar. Use **,but**.

Trace. Then write it twice.



My sentence has:

- correct capitals correct punctuation best try at spelling makes sense

Sight Words

Unscramble the letters.

night warm almost walked

m w r a _____

d k l a w e _____

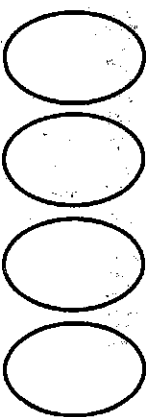
g t i n h _____

s o m l a t _____


Show the multiplication fact in 4 different ways.

repeated addition

picture of sets



area **4 x 3** array



There are 30 dots altogether.



There are 6 equal groups. How many in each group?

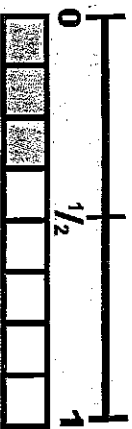
_____ dots in each group
 $30 \div 6 = \underline{\hspace{2cm}}$

The dots are in groups of 5.
 How many groups are there?

_____ groups of dots
 $30 \div 5 = \underline{\hspace{2cm}}$

Three-eighths is:

- closest to 0 closest to $\frac{1}{2}$ closest to 1



$\frac{3}{8}$ and _____ make 1 whole.



- 1:25 12:25
 5:03

After the Fun Run, the students drank 382 liters of water. The teachers and parents drank 260 more liters than the students. How many liters of water did the grown-ups drink?



one hundred forty

I can use clues to find the meaning of unknown words.

Having a Ball

The game of basketball was invented over 100 years ago in 1891. Dr. James Naismith was a PE teacher in Massachusetts. He was asked to invent a lively game that was easily learned, so the students could play inside during the bitter winters. The sport Naismith invented looked very different than basketball today. The first game was played with 9 players on each team because Dr. Naismith had 18 students in his class. Today, there are only 5 players on each team. The ball was a soccer ball and instead of nets they used actual baskets nailed to the walls. Every time someone made a basket the janitor had to bring out the ladder and climb up to get the ball out! Eventually a hole was made in the bottom of the basket so a stick could be used to push the ball up and out. During the first game, they realized a name was needed for this new sport. Someone suggested it be called *Naismith Game* after the inventor, but Dr. Naismith disagreed. "We have a ball and a basket; why don't we call it basketball?" The name has stuck. Today children and adults all over the world enjoy playing basketball. It's a good way to exercise, but more than that, it's an excellent way to have fun! Dr. Naismith never made any money from his invention. Perhaps the next time you pick up a basketball you can think of that PE teacher nailing baskets on the wall so long ago.

What does *disagreed* mean? What clues helped you figure it out?

Whisper read the passage to yourself. Rate your reading fluency.

Accuracy I read the words correctly.	Pace I wasn't too fast, I wasn't too slow.	Punctuation I paused at the punctuation marks.	Like Talking I read smoothly, not choppy.	Expression I give the words some feeling.
○○○○○	○○○○○	○○○○○	○○○○○	○○○○○

5 apples = perfect 4 apples = pretty good 3 apples = alright 2 apples = I could do better 1 apple = I didn't try

Next time I will work on _____

one hundred forty-one



I felt **sorrow** when I lost the game. I felt **sorrow** when my dog died and when my friend moved.

What does **sorrow** mean? _____

When have you felt sorrow? _____

Some nouns that end in f...
...make plural by adding ves.



Singular: _____



Plural: _____

Theres an fantastik old cabin in atlantic iowa

fantastik


atlantic

iowa

gumption

[noun] You have **gumption** if you have the bravery and confidence to get something done.

Draw a picture of the word.



My bedroom is 5 meters long and 3 meters wide. What is the area of my bedroom?

Ava measured the length of her hair ribbons in inches.

Hair Ribbon Lengths

	X	X	X	X	X	X	X	X	X
8	8 1/4	8 1/2	8 3/4	9	9 1/4	9 1/2			

1. _____ ribbons are 8 1/2 inches long.

2. Five ribbons are _____ inches long.



3. _____ ribbons are nine inches or longer.

4. There are _____ more 9 1/4 inch ribbons than 8 inch ribbons.

5. The same amount of ribbons are _____ and _____ inches.

Choose 3-in-a-row to solve.

$$\begin{array}{r} 516 \\ + 377 \\ \hline \end{array}$$

$$\begin{array}{r} 907 \\ - 431 \\ \hline \end{array}$$

$$\begin{array}{r} 808 \\ - 194 \\ \hline \end{array}$$

$$\begin{array}{r} 492 \\ + 209 \\ \hline \end{array}$$

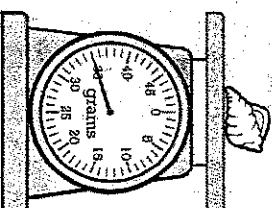
$$\begin{array}{r} 211 \\ + 563 \\ \hline \end{array}$$

$$\begin{array}{r} 702 \\ - 458 \\ \hline \end{array}$$

$$\begin{array}{r} 860 \\ - 373 \\ \hline \end{array}$$

mass: amount of matter in something

The mass of this shell is about _____ grams



What is the same as:
3 hundreds 14 tens

- 440
- 314
- 404



one hundred forty-two

We had a great day playing at the beach with some friends. Getting to stay up really late was just the **icing on the cake**.
What does *icing on the cake* mean?

Fill in the blank with a possessive pronoun:
my, your, her, their, our
That is Lowrie's nickel.
That is _____ nickel.

Write a complex sentence that starts with **since**.

Trace. Then write it twice.



- My sentence has:
- correct capitals
 - correct punctuation
 - best try at spelling
 - makes sense

Sight Words

Write one letter in each box. Spell the words correctly.

give

truth

follow

question

Break apart each word. Write the suffix and its meaning, the base word, and a simple definition for each word.

word	suffix means	base word	definition
correction	-ion = the act of	correct	the act of correcting
invention	-ion = the act of	invent	
selection	-ion = the act of		
protection			
hibernation			

My brother threw 32 snowballs. It took him 4 minutes. He threw the same number of snowballs each minute. How many snowballs did he throw in 1 minute?

About how much does an start elephant weigh at birth?

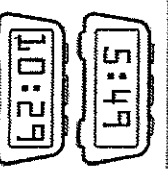
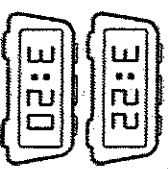
$$\begin{array}{r} 862 \\ -347 \\ \hline \end{array}$$

$$\begin{array}{r} \square\square\square \\ +148 \\ \hline \end{array}$$

$$\begin{array}{r} \square\square\square \\ -792 \\ \hline \end{array}$$

$$\begin{array}{r} \square\square\square \\ +249 \\ \hline \end{array}$$

kilograms



I have \$5.60 in dimes. How many dimes do I have?

- 56 560 50

one hundred forty-three



Write ick, ic, or x to finish each word.

traff _____ st _____ pref _____

qu _____ remi _____ picn _____

Some nouns that end in fe...
...make plural by adding ves.



Singular: _____



Plural: _____

the two owls hoots was loudest than the wind

gumption

[noun] You have **gumption** if you have the bravery and confidence to get something done.

Examples or synonyms:

Nonexamples or antonyms:

Write the number in expanded form:

Draw the base-10 blocks:

100 more	
100 less	
10 more	
10 less	

● = 1 | = 10 □ = 100

How many groups of 10 are in 106?

106

Circle true or false.

The closest ten to 106 is 100.

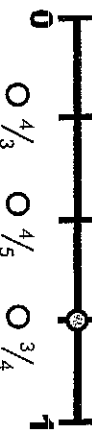



TRUE FALSE


A number has 16 tens and 4 hundreds. What is the number?

Write a 3-digit number with a 0 in it. What is the value of 0 in your number?

What fraction is marked on the line?



Draw  to show $3 \times 3 = 9$.

Draw  to show $7 \times 2 = 14$.

The nursery had 804 flowers. They sold some of them. Now they have 281 flowers left. How many flowers did they sell?



one hundred forty-four

Add -ion to the end of each word.

suggest _____ act _____ construct _____
 Use one of the words to complete the sentence.
 You gave a good _____.

Write the missing comma & quotation marks to fix the sentence.

I asked Did you see a rainbow?
 I don't like chicken Owen said.

Write something you might say to a crowd. Use quotation marks.

Trace. Then write it twice.



My sentence has:

- correct capitals correct punctuation best try at spelling makes sense

Sight Words

Use a word in the box to complete each sentence.

truth give question follow

1. Can I _____ the path?
2. Do you have a _____?
3. Always tell the _____.
4. Please _____ me a hand.

There were some cowboys at the rodeo when it started. 206 more cowboys arrived. Now there are 639 cowboys at the rodeo. How many cowboys were there when the rodeo started?



a sock

Would you rather be...



Use complete sentences. a shoe

my opinion:

strong reason #1

strong reason #2

strong reason #3

Partition the line into 3 equal parts. One part is done for you.



Label each fraction on the line.

$\frac{1}{3}$ $\frac{3}{3}$ $\frac{2}{3}$ $\frac{0}{3}$



- 8:55
- 11:40
- 7:55

$$6 \times 2 = 12$$

$$12 \div 2 = \underline{\quad}$$

$$5 \times 4 = 20$$

$$20 \div 4 = \underline{\quad}$$

$$2 \times \underline{\quad} = 14$$

$$14 \div 2 = \underline{\quad}$$

$$7 \times 3 = 21$$

$$21 \div 3 = \underline{\quad}$$


$$\underline{\quad} \times 8 = 32$$

$$32 \div 8 = \underline{\quad}$$

$$\underline{\quad} \times 9 = 27$$

$$27 \div 9 = \underline{\quad}$$

one hundred forty-five



I can describe a character's thoughts, actions, and feelings.

Hoop-Hoop-Hooray!


The school talent show was coming up. Every time Jazmin walked past one of the posters she rolled her eyes, but she was the only one; everyone else was excited. As they walked to PE, Jazmin listened to the happy chatter around her. "What are you going to do for the talent show?" Brielle asked. Jazmin shrugged. "I'm not really good at anything. I'm talentless." Karine gave her a pat on the back. Jazmin knew her friends were just trying to be nice, but talking about it with them made her feel worse. When they got to class, the teacher had a surprise for them: hula hoops! Each student got a hoop and they spread out on the floor. Kids were squirming and wiggling as hard as they could, but all over the gym you could hear hoops crashing to the floor. All of the hoops, that is, except one—Jazmin's. Soon everyone stopped to watch. The hula hoop whirled around and around her waist. She slowed it down and sped it up again. She twirled it on her arm, on a leg, even on her neck. "Go Jazmin! Go Jazmin!" the other students chanted. Nothing could stop that hoop! At the end of class she caught up with her friends. "I'm not talentless anymore. I know what to do for the talent show," Jazmin told them. "And you better watch out because I just might win!"

says

My Character

feels

name _____



thinks

does



one hundred forty-six

prediction [noun] Your idea of what will happen in the future is a prediction.

Which words mean about the same as prediction?

- guess disagree foresee expect

Some nouns that end in t...

...make plural by adding yes.



Singular: _____



Plural: _____

Carrows book have elfs dwarfs and dragons

Phogafes
Phogafes
Stewern

gumption

[noun] You have **gumption** if you have the bravery and confidence to get something done.

What meaning does this word have in your life?

My connection to the word:

Number Line Facts

Show the first fact on top of the number line. Show the second fact on the bottom number line.

$6 \times 5 = 30$



$5 \times 6 = \underline{\quad}$

What do you notice?

Use the code to write the problem. Then solve.

= 345 = 602
 = 497 = 158

+ = _____

+ _____ = _____

A **parallelogram** has 2 sets of parallel lines. Examples:



A **trapezoid** only has 1 set of parallel lines. Circle the trapezoid's parallel lines.



A number has 4 tens and 25 ones. What is the number?

- 425 65 29

A packet of flower seeds costs \$5 each. How much do 8 packets cost?

one hundred forty-seven



Cross-out the words with a different vowel sound than shout.

snow out boy clown one
ground brown grown though
count bowl cough south

Fill in the blank with a possessive pronoun:

my, your, his, their, our

They have a little chick.

It is _____ chick.

Write a compound sentence about snow. Use **, yet**.

Trace. Then write it twice.



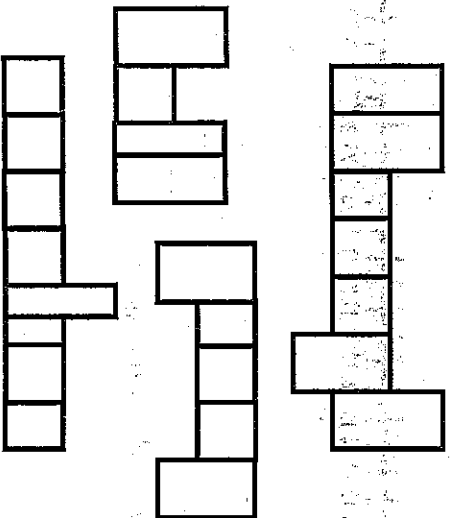
My sentence has:

- correct capitals correct punctuation best try at spelling makes sense

Sight Words

Write each word in the box it fits.

group half vacation through



Open a book. Hunt for words to list in each box.

nouns

COMMON

* Proper nouns need capitals!

PROPER

verbs

PAST

PRESENT

FUTURE

pronouns

adjectives

describes nouns

adverbs

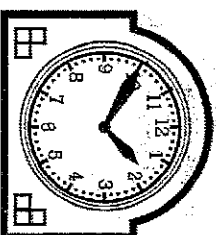
describes when, where, or how

My block tower has 36 blocks. It has 4 times as many blocks as Merrick's block tower. How many blocks are in Merrick's tower?

Solve the problems. If there are more ODD answers than even, color the monster blue. If there are more EVEN answers, color him yellow.

251	358
+ 170	+ 417
-----	-----

306	736
- 39	- 582
-----	-----



It's 1:50. Jackson has been riding his bike for 40 minutes. When did he start riding?

$\frac{2}{3}$ \bigcirc $\frac{2}{3}$

$\bigcirc >$ $\bigcirc <$ $\bigcirc =$



one hundred forty-eight

Celebration is the act of celebrating.

What does direction mean?

What does collection mean?

Some nouns that end in f...

...make plural by adding ves.



Singular: _____



Plural: _____

last friday we has an picnic in the meadow

150
celebration

150
celebrations

150
celebrations

area: the measure of space inside a shape

It took a lot of gumption to say...

Write the length and width of each rectangle. Multiply to find the area.




figure	length	width	area
A	_____ cm	_____ cm	_____ cm ²
B	_____ cm	_____ cm	_____ cm ²
C	_____ cm	_____ cm	_____ cm ²



At the bakery there are 205 plain brownies and 92 mint brownies. How many brownies are at the bakery?

$$7 \times 4 = \underline{\quad}$$

$$70 \times 4 = \underline{\quad}$$

$$5 \times 3 = \underline{\quad}$$

$$50 \times 3 = \underline{\quad}$$

$$8 \times 6 = \underline{\quad}$$

$$80 \times 6 = \underline{\quad}$$

Show **347** on the number line.



Underline the 2 tens that the number is between. (Circle) the closest ten.

347 rounds to _____.

$$\square \times 6 = 48$$

0 54 0 8 0 12

one hundred forty-nine



Write the words in order from weakest to strongest.

purr growl howl roar

weakest > < strongest

Write a sentence about 3 things that are relaxing. Use commas.

Write the missing comma & quotation marks to fix the sentence.

The pillow is mine said Mick.

I asked Who took the lawnmower?

Trace. Then write it twice.

asked

My sentence has:

- correct capitals
- correct punctuation
- best try at spelling
- makes sense

Sight Words

Unscramble the letters.

group half vacation through

taccovni _____

flah _____

hhgutor _____

gpuro _____

Show the multiplication fact in 4 different ways.



repeated addition

picture of sets

area

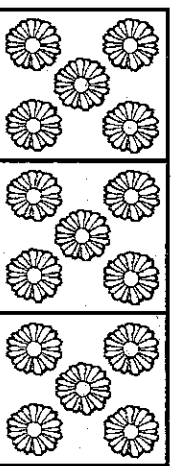
3 x 6

array



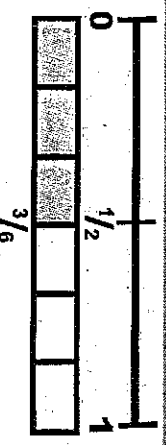
6 ÷ 2 = _____

6 ÷ 3 = _____



15 ÷ 3 = _____

15 ÷ 5 = _____



Three-sixths is:

- exactly 0
- exactly 1/2
- exactly 1
- 3/6 and _____ make 1 whole.



- 2:30
- 2:31
- 6:10

Harlowe sold 207 tickets to the band concert. She sold 112 fewer tickets than Knowlton. How many tickets did Knowlton sell?

one hundred fifty

I can use clues to find the meaning of unknown words.

Hoop-Hoop-Hooray!

The school talent show was coming up. Every time Jazmin walked past one of the posters she rolled her eyes, but she was the only one; everyone else was excited. As they walked to PE, Jazmin listened to the happy chatter around her. "What are you going to do for the talent show?" Brielle asked. Jazmin shrugged. "I'm not really good at anything. I'm talentless." Karine gave her a pat on the back. Jazmin knew her friends were just trying to be nice, but talking about it with them made her feel worse. When they got to class, the teacher had a surprise for them: hula hoops! Each student got a hoop and they spread out on the floor. Kids were squirming and wiggling as hard as they could, but all over the gym you could hear hoops crashing to the floor. All of the hoops, that is, except one—Jazmin's. Soon everyone stopped to watch. The hula hoop whirled around and around her waist. She slowed it down and sped it up again. She twirled it on her arm, on a leg, even on her neck. "Go Jazmin! Go Jazmin!" the other students chanted. Nothing could stop that hoop! At the end of class she caught up with her friends. "I'm not talentless anymore. I know what to do for the talent show," Jazmin told them. "And you better watch out because I just might win!"

What does *talentless* mean? What clues helped you figure it out?

Whisper read the passage to yourself. Rate your reading fluency.

Accuracy	Pace	Punctuation	Like Talking	Expression
I read the words correctly.	I wasn't too fast, I wasn't too slow.	I paused at the punctuation marks.	I read smoothly, not choppy.	I give the words some feeling.
🍏🍏🍏🍏🍏	🍏🍏🍏🍏🍏	🍏🍏🍏🍏🍏	🍏🍏🍏🍏🍏	🍏🍏🍏🍏🍏

5 apples = perfect 4 apples = pretty good 3 apples = alright 2 apples = I could do better 1 apple = I didn't try

Next time I will work on _____.

one hundred fifty-one



Use the clues in the sentences and write the missing words.

Our field trip is to the _____.

I'm excited for this _____.

We will have a _____ time!

excursion

great

aquarium

Helping verb (be, will, etc.) + main verb = verb phrase

Underline the verb phrase. Circle the helping verb.

I will wash the dishes tonight.

He can speak Chinese.

Are Lucy saving pennys dimes and quarters

save


spend

spend

possession

[noun] Anything that you own is a possession.

Draw a picture of the word.

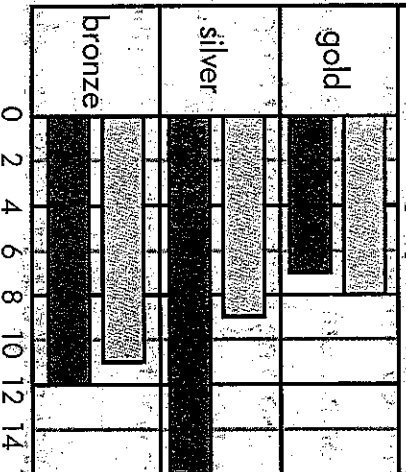


My paper is 20 centimeters long and 6 centimeters wide.

What is the area of my paper?

Medals won by Italy and Australia at the 2012 Summer Games.

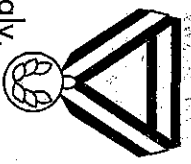
2012 Olympic Medals



key: = Italy
 = Australia

1. Italy won _____ golds.
Australia won _____ golds.

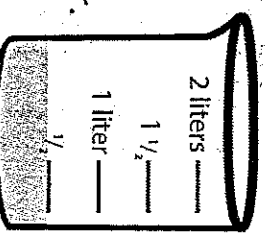
2. _____ won
11 bronze medals.



3. Italy won _____ medals in all.
4. Australia won _____ more silver medals than Italy.

volume: the space something takes up

There is _____ liter _____ in the beaker.



What is the same as:
73 tens 5 ones

- 708 78 735

Choose 3-in-a-row to solve.

123	348	906
+460	+524	-717

813	780	225
-675	-193	+467

492	600	944
+216	-481	-395



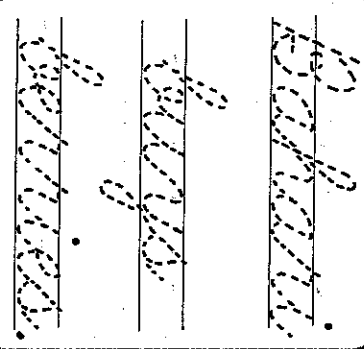
one hundred fifty-two

My best friend and I always sit together. We play together and try to do our work together. Our teacher says that we're joined at the hip. What does *joined at the hip* mean?

Answer the address question. Don't forget the comma!
Where were you born?

Write a complex sentence that starts with **if**.

- My sentence has:
- correct capitals
 - correct punctuation
 - best try at spelling
 - makes sense



Sight Words

Write one letter in each box. Spell the words correctly.

money	every

quickly

answer

Break apart each word. Write the suffix and its meaning, the base word, and a simple definition for each word.

word	suffix means	base word	definition
expression	-sion = the act of	express	the act of expressing
decision	-sion = the act of	decide	
confusion	-sion = the act of		
discussion			
explosion			


Quinton spends \$10 a day on lunch. How much does he spend in 7 days?

What speed record was set by a ^{start} motorcycle in 2010?

$\begin{array}{r} 405 \\ -192 \\ \hline \end{array}$	$\begin{array}{r} \square\square\square \\ +607 \\ \hline \end{array}$
$\begin{array}{r} \square\square\square \\ -391 \\ \hline \end{array}$	$\begin{array}{r} \square\square\square \\ +176 \\ \hline \end{array}$

kilometers per hour

Draw the hands to show the time.



5 quarters, 6 dimes

- \$5.60
- \$1.85
- \$1.60

one hundred fifty-three



Add qu to finish each word. Draw a line to the picture.

s irrel e ator arter



Helping verb (be, will, etc.) + main verb = verb phrase
Underline the verb phrase. Circle the helping verb.

We are walking home.
You must finish this book.

since has hungry quin is shopping for groceries

since has hungry quin is shopping for groceries

since has hungry quin is shopping for groceries

since has hungry quin is shopping for groceries

possession

[noun] Anything that you own is a **possession**.

Examples or synonyms:

Write >, <, or =

325 30 tens 5 ones

325 352

325 325 × 1

How many groups of 20 are in 325?

325

Circle true or false.

The closest ten to 325 is 330.



TRUE FALSE

Match pairs of numbers that can be added to make 325.

105	220
275	125
200	50

Nonexamples or antonyms:

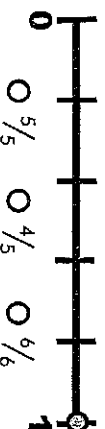
Bentley and Quincy have some toy army guys. They lost 83 of them, but they still have 268 left. How many army guys did they have to start with?

Color even products yellow.
Color odd products red.

8x8=	6x6=	9x9=	3x3=
1x1=	5x5=	4x4=	

A number has 5 hundreds, 9 tens, and 24 ones. What is the number?
Which number is 100 more than 37 ones 6 hundreds?

What fraction is marked on the line?





one hundred fifty-four

Use the -sion suffix to make a new word out of the bold words.

The directions **are confusing**.

They have made a lot of **_____**.

+ **_____** = **_____**

base word

suffix

new word

Rewrite the sentence to include a possessive collective noun.

Those are the toys of the children.

Those are the **children's toys**.

Write a question you might ask a squirrel.

My sentence has:

- correct capitals correct punctuation best try at spelling makes sense

Do

they

they

Sight Words

Use a word in the box to complete each sentence.

answer money quickly every

- I washed _____ dish.
- I did my work _____.
- Did you _____ me?
- I owe you some _____.

The teacher graded 396 quizzes. Then he graded 75 more. How many quizzes did he grade in all?



a lock

Would you rather be...

Use complete sentences.



a key

my opinion:

strong reason #1

strong reason #2

strong reason #3

$5 \times 4 = 20$

$_____ \times 6 = 42$

$20 \div 4 = _____$

$42 \div 6 = _____$

$2 \times _____ = 18$

$_____ \times 3 = 3$

$18 \div 2 = _____$

$3 \div 3 = _____$

$_____ \times 4 = 24$

$_____ \times 8 = 64$

$24 \div 4 = _____$

$64 \div 8 = _____$

Dylan ate $\frac{1}{3}$ of his candy bar. Coco ate $\frac{2}{6}$ of her candy bar. Who ate the most? Explain.



- 10:40
- 11:40
- 8:53

one hundred fifty-five



I can describe steps in a process using transition words.

Color Me Happy

At one time or another, almost everyone has used a crayon. Since the first box of Crayola crayons was sold for a nickel in 1903, crayons have been a requisite part of childhood. No one should grow up without crayons! A crayon starts with paraffin wax. The wax arrives at the crayon factory by train. It is then heated with steam and pumped into large heated tanks. When it's time to make the crayons, the wax is pumped into the factory. There it's mixed with the pigment, or color, in a large mixer. Next, the mixture is pumped over to a special mold filled with hundreds of crayon shaped holes. The liquid mixture fills the mold and cool water is poured over it to help the crayons set. This process happens very quickly—in about 1 minute! After this, the crayons are solid enough to be pushed out of the mold. Then it's time for labeling. Special machines cut, heat, and double wrap a label on each crayon. This machine is so fast that it can label 650 crayons per minute! At this point, workers check for any broken tips. Finally, the finished crayons are placed in boxes. One factory can produce 13.5 million crayons per day—that's 3 billion crayons per year! If you laid those crayons end-to-end, they would circle the earth six times. We certainly love our crayons, but they're so fun to use who could blame us?

Label the steps in the process.

Use complete sentences and transition words to give details about the step.

1
wax arrives

First, wax arrives and is pumped into tanks before being pumped inside.

2

3

4

5

transition words: first, next, last, finally, later, after, second, third, then, soon, now, earlier, eventually...



one hundred fifty-six

quiver [verb] You **quiver** if you shake because you are scared or nervous.

The word *quiver* is connected to thunder because...

Helping verb (be, will, etc.) + main verb = verb phrase
Underline the verb phrase. Circle the helping verb.

The baby should have eaten by now.

He is faster than Carol.

in hawaii we finded a buryd antique spyglass

copy
copy is
copying.

possession

[noun] Anything that you own is a **possession**.

What meaning does this word have in your life?

My connection to the word:

Patterns with x9

$9 \times 1 = \underline{\quad}$

$9 \times 6 = \underline{\quad}$

$9 \times 2 = \underline{\quad}$

$9 \times 7 = \underline{\quad}$

$9 \times 3 = \underline{\quad}$

$9 \times 8 = \underline{\quad}$

$9 \times 4 = \underline{\quad}$

$9 \times 9 = \underline{\quad}$

$9 \times 5 = \underline{\quad}$

$9 \times 10 = \underline{\quad}$

What patterns do you notice about the x9 facts?

Jars of honey cost \$8 each.
How many jars can you get with \$56?

Use the code to write the problem.
Then solve.

= 345 = 602
 = 497 = 158

- =

 - =

A **trapezoid** has 1 set of parallel lines. Why can't this rectangle also be a trapezoid?



WORD BANK
sides
angles
parallel
straight

A number has 8 tens and 53 ones.
What is the number?

- 853 153 133

one hundred fifty-seven



Cross out the words where y makes a different sound than city.

funny try boy puppy July
fly easy silly heavy
tiny yellow cry enjoy country


Answer the question. Don't forget the comma!

Where were you born?

Write something you might say to a guy. Use quotation marks.

My sentence has:

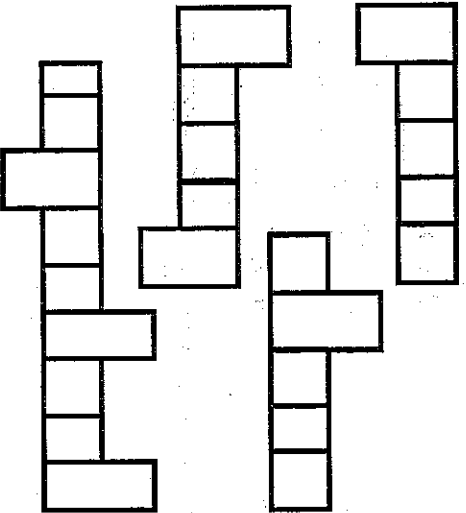
- correct capitals correct punctuation best try at spelling makes sense



Sight Words

Write each word in the box it fits.

heavy important years where



Open a book. Hunt for words to list in each box.

nouns

COMMON

* Proper nouns need capitals!

PROPER

verbs

PAST

PRESENT

FUTURE

adjectives

pronouns

describes nouns

adverbs

describes when, where, or how

Emily's canary sings for 27

minutes. It sings for 3 times


as long as Parvati's canary.
How long does Parvati's
canary sing?

Solve the problems. If there are more

ODD answers than even, color the
monster red. If there are more EVEN
answers, color her orange.

$$\begin{array}{r} 529 \\ - 75 \\ \hline \end{array}$$

$$\begin{array}{r} 792 \\ + 108 \\ \hline \end{array}$$



$$\begin{array}{r} 436 \\ + 386 \\ \hline \end{array}$$

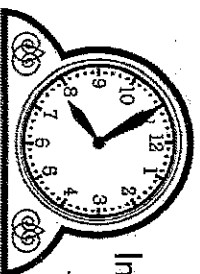
$$\begin{array}{r} 346 \\ - 129 \\ \hline \end{array}$$

It's 7:55.

In 15 minutes,

Jiwoo needs
to leave
for school.

What time will she leave?



$$\frac{1}{4} \bigcirc \frac{1}{2}$$

$\bigcirc >$ $\bigcirc <$ $\bigcirc =$



one hundred fifty-eight

permission: to allow something to happen

Mom is permitting me to have a sleepover.

What's the shared base word of the underlined words?

Helping verb (be, will, etc.) + main verb = verb phrase
Underline the verb phrase. Circle the helping verb.


Would you like some water?

She has always loved broccoli.

last july we lookt at the ladies fancy dressis


Stunning
Quaranties
to water

I am in possession of many talents such as...

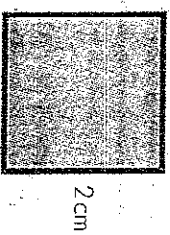


area: the measure of space inside a shape


What is the area of each rectangle?



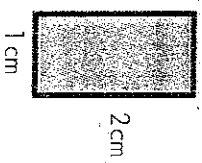
area = _____ cm²



area = _____ cm²



area = _____



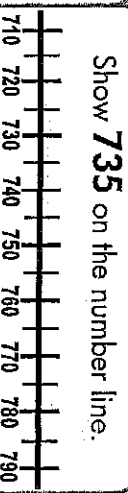
area = _____

Quanda has 313 stickers in her collection. 192 of them are puppy stickers and the rest are bunnies. How many of the stickers are bunnies?

$1 \times 10 = \underline{\quad}$
 $10 \times 10 = \underline{\quad}$

$8 \times 4 = \underline{\quad}$
 $80 \times 4 = \underline{\quad}$

$6 \times 3 = \underline{\quad}$
 $60 \times 3 = \underline{\quad}$



Underline the 2 tens that the number is between. Circle the closest ten.

735 rounds to _____.

$63 \div \square = 7$
0 9 0 70 0 8

one hundred fifty-nine



Write the word that completes the sentence.
 looked stared **peeked**
(a quick look)

I sunburned my eyes because I _____
 at the sun for too long.

Rewrite the sentence to include a possessive collective noun.

The chanting of the crowd was noisy.

The _____ chanting was noisy.

Write a compound sentence about your family. Use **and**.

My sentence has:

- correct capitals correct punctuation best try at spelling makes sense

My family and I went to the park.

My family and I went to the park.

My family and I went to the park.

Sight Words

Unscramble the letters.

heavy important years where

ttarpomin _____

yraes _____

eehrw _____

vaeyha _____

Show the multiplication fact in 4 different ways.


repeated addition

picture of sets

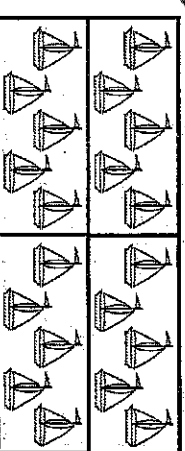
area

2 x 7

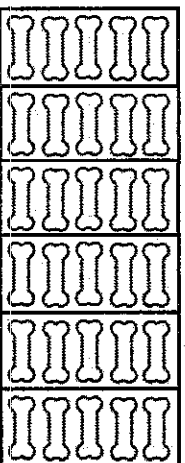
array



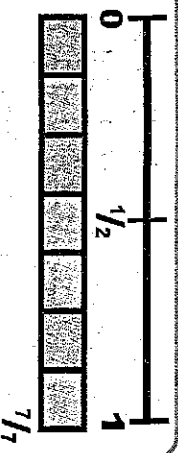
Sammy Squirrel gathered 522 acorns. Samantha Squirrel gathered 360 acorns. How many fewer acorns did Samantha gather than Sammy?



20 ÷ 4 = _____ 20 ÷ 5 = _____



30 ÷ 6 = _____ 30 ÷ 5 = _____



Seven-sevenths is:

- exactly 0 exactly $\frac{1}{2}$ exactly 1
- $\frac{7}{7}$ and _____ make 1 whole.



- 6:10 2:30
- 1:30



one hundred sixty

I can use clues to find the meaning of unknown words.

Color Me Happy

At one time or another, almost everyone has used a crayon. Since the first box of Crayola crayons was sold for a nickel in 1903, crayons have been a requisite part of childhood. No one should grow up without crayons! A crayon starts with paraffin wax. The wax arrives at the crayon factory by train. It is then heated with steam and pumped into large heated tanks. When it's time to make the crayons, the wax is pumped into the factory. There it's mixed with the pigment, or color, in a large mixer. Next, the mixture is pumped over to a special mold filled with hundreds of crayon shaped holes. The liquid mixture fills the mold and cool water is poured over it to help the crayons set. This process happens very quickly—in about 1 minute! After this, the crayons are solid enough to be pushed out of the mold. Then it's time for labeling. Special machines cut, heat, and double wrap a label on each crayon. This machine is so fast that it can label 650 crayons per minute! At this point, workers check for any broken tips. Finally, the finished crayons are placed in boxes. One factory can produce 13.5 million crayons per day—that's 3 billion crayons per year! If you laid those crayons end-to-end, they would circle the earth six times. We certainly love our crayons, but they're so fun to use who could blame us?

What does *requisite* mean? What clues helped you figure it out? (hint: think about the word *require*)

Whisper read the passage to yourself. Rate your reading fluency.

Accuracy I read the words correctly.	Pace I wasn't too fast, I wasn't too slow.	Punctuation I paused at the punctuation marks.	Like Talking I read smoothly, not choppy.	Expression I give the words some feeling.
○○○○○	○○○○○	○○○○○	○○○○○	○○○○○

5 apples = perfect 4 apples = pretty good 3 apples = alright 2 apples = I could do better 1 apple = I didn't try

Next time I will work on _____.

one hundred sixty-one



The weather is **changeable**. Moods and clothes are **changeable**. The past isn't **changeable**.

What does **changeable** mean? _____

What else is **changeable**? _____

Write the past, present, and future of each verb.

verb	past	present	future
jump	jumped	jump	will jump
run			

if he were honest his answer would be believable

to jump


is jumping

will jump

indispensable

[adjective] Something that you absolutely can't go without is **indispensable**.

Draw a picture of the word.



The rug in the living room has an area of 6 meters². It is 3 meters long. How wide is the rug?


Average rainfall in Denver, CO (rounded to the nearest 1/2 inch).

Inches of Rainfall in a Month

key: X = 1 month

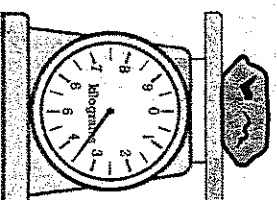
X	X	X	X	X	X
X	X	X	X	X	X
X	X	X	X	X	X
1/2	3/4	1	1 1/4	1 1/2	1 3/4
2	2 1/4				

- Three months get a _____ inch of rain.
- _____ months get 1 3/4 inches of rain.
- _____ months get more than 1 inch of rain.
- There are _____ fewer months with 2 inches of rain than months that get 1 3/4 inches of rain.



mass: amount of matter in something

The mass of this rock is about _____ kilograms



What is the same as:
4 hundreds 39 tens

- 439 ○ 790 ○ 709

Choose 3-in-a-row to solve.

$$\begin{array}{r} 548 \\ +206 \\ \hline \end{array}$$

$$\begin{array}{r} 102 \\ +27 \\ \hline \end{array}$$

$$\begin{array}{r} 860 \\ -387 \\ \hline \end{array}$$

$$\begin{array}{r} 778 \\ -691 \\ \hline \end{array}$$

$$\begin{array}{r} 314 \\ -182 \\ \hline \end{array}$$

$$\begin{array}{r} 512 \\ +464 \\ \hline \end{array}$$

$$\begin{array}{r} 445 \\ +460 \\ \hline \end{array}$$

$$\begin{array}{r} 629 \\ -99 \\ \hline \end{array}$$

$$\begin{array}{r} 207 \\ -148 \\ \hline \end{array}$$



one hundred sixty-two

I wanted to tell Dad how funny it was when Mom walked into the wall, but Mom said that I'd better zip my lip.
What does *zip my lip* mean?

Write the correct comparative or superlative.
Of the three of us, John is the oldest.
old

She works harder than I do.

Write a compound sentence.

My sentence has:

- correct capitals correct punctuation best try at spelling makes sense

Revisions

copying

copying

Sight Words

Write one letter in each box. Spell the words correctly.

begin

listen

across

lovable

Break apart each word. Write the suffix and its meaning, the base word, and a simple definition for each word.

word	suffix means	base word	definition
likable	-able = can be	like	can be liked
readable	-able = can be	read	
enjoyable	-able = can be		
moveable			
trainable			

A golf cart can drive 30 kilometers in an hour. How far can it go in 8 hours?

Bowhead whales can live start to be how old?

$$\begin{array}{r} 654 \\ - 381 \\ \hline \end{array}$$



$$\begin{array}{r} 528 \\ + 528 \\ \hline \end{array}$$

$$\begin{array}{r} 54 \\ - 768 \\ \hline \end{array}$$

$$\begin{array}{r} 528 \\ + 167 \\ \hline \end{array}$$

_____ years old

Write the time.



- 8 dimes, 6 quarters, 1 penny
- \$8.61 \$1.81 \$2.31

one hundred sixty-three



Write b, t, or n to finish each word.

autum__ thum__ lam__

lis_en colum__ sof_en

Write the past, present, and future of each verb.

verb	past	present	future
walk			
look			

the knights horsis are kept outside the casle

Walters

Walters

Walters

indispensable

adjective Something that you absolutely can't go without is **indispensable**.

Examples or synonyms:

Nonexamples or antonyms:

Write >, <, or =

1000 1000 × 0

1000 400 + 600

1000 2000

How many groups of 100 are in 1000?

100 more	
100 less	
10 more	
10 less	

1000

Solve.

1000	1000
920	700

1000	
540	

10 people fit at a table. How many tables are needed for 295 people?

10 tables fit in a room. How many rooms are needed for all the tables?

Color even products purple. Color odd products green.



What fraction is shaded?



There were 539 people at the movie theater. 206 people left. How many people are still at the theater?



one hundred sixty-four

Add -able to the end of each word.

teach _____ avoid _____ move _____

Use one of the words to complete the sentence.

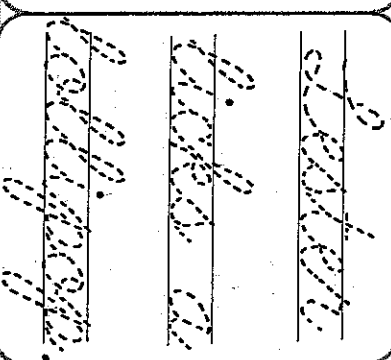
A laptop is a _____ computer.

Introductory clauses or phrases start sentences and need commas. Add commas after each introductory clause/phrase.
After watching the game, I felt terrible.
To open the box I had to get a hammer.

Write a question about a whistle.

My sentence has:

- correct capitals
- correct punctuation
- best try at spelling
- makes sense



Sight Words

Use a word in the box to complete each sentence.

begin across lovable listen

1. _____ to this song.
2. Did the show _____?
3. Sit _____ from me.
4. The baby is so _____.

Necalli has 291 basketball cards in his collection. How many more cards does he need to get in order to have 400 basketball cards?



cookie

Would you rather be...

Use complete sentences.



milk

my opinion:

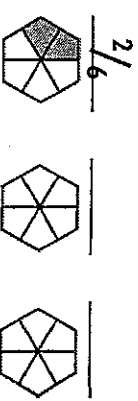
strong reason #1

strong reason #2

strong reason #3

List the fractions in order from smallest to largest. Then color the pictures to show each fraction.


$\frac{2}{6}$ $\frac{3}{6}$ $\frac{5}{6}$ $\frac{2}{6}$



$9 \times 5 = 45$	$\frac{\quad}{\quad} \times 2 = 8$
$45 \div 5 = \underline{\quad}$	$8 \div 2 = \underline{\quad}$
$\underline{\quad} \times 8 = 40$	$6 \times \underline{\quad} = 18$
$40 \div 8 = \underline{\quad}$	$18 \div 6 = \underline{\quad}$
$7 \times \underline{\quad} = 28$	$\underline{\quad} \times 4 = 16$
$28 \div 7 = \underline{\quad}$	$16 \div 4 = \underline{\quad}$



- 7:33
- 6:37
- 6:47



I can describe how and why a character changes.

Luck of the Draw

The classes shuffled into the gym for the assembly and took their seats. Tyrell looked at the other children around him. No one else was excited for an assembly either. Tyrell thought the only good thing about this assembly was that their spelling test would be delayed for a little while longer. The kids quieted down and the principal introduced the guest speaker: a woman named Pam who worked as an illustrator. When Tyrell heard that she did the pictures for his favorite book series, The Adventures of Dino-Bot and Future Man, he sat up a little straighter. Maybe he was interested in this after all. Tyrell listened to Pam talk about storyboards and editors. She shared some sneak peeks of the new Dino-Bot pictures she was drawing. Tyrell leaned forward in his seat to get a better look. Then she asked if anyone had a question. Tyrell's hand shot up first. "How can I become an illustrator when I grow-up?" he asked. Pam told him to draw and write as much as he could and when he got older to take some art classes. Tyrell was so excited he could barely hold still. His fingers were itching to pick up a pencil and do some drawing. Pam finished answering questions and everyone applauded. As the students walked back to class, Tyrell felt lucky to have attended such an amazing assembly.

Use clues in the story to tell how the main character changed from the beginning to the end of the story.

The event that caused
the character to change was...

The character's thoughts and
feelings at the beginning...

How did the character
feel about what happened to
him?

The character's thoughts and
feelings at the end...

extra pages

not required





one hundred sixty-six

doubt [verb] If you don't think something is true, you doubt it.

If someone has lied to you before, should you doubt everything they tell you now?

Write the past, present, and future of each verb.			
verb	past	present	future
give			
eat			

among the ships wreckage treasure was finded

among

wreckage

treasure

indispensable

[adjective] Something that you absolutely can't go without is **indispensable**.

What meaning does this word have in your life?
My connection to the word:

1 x 2 =
 2 x 2 =
 3 x 2 =
 4 x 2 =
 5 x 2 =
 6 x 2 =

1 x 4 =
 2 x 4 =
 3 x 4 =
 4 x 4 =
 5 x 4 =
 6 x 4 =

1 x 8 =
 2 x 8 =
 3 x 8 =
 4 x 8 =
 5 x 8 =
 6 x 8 =

Patterns with x8

How are the x2, x4, and x8 facts related?

A DVD of a TV series costs \$20. How much would you pay if you bought all 6 seasons of the series?

Use the code to write the problem. Then solve.

= 345 = 602
 = 497 = 158

+ =

 + =

A rhombus has 2 sets of parallel lines. All the sides are the same length. Examples:

Why isn't a rectangle a rhombus?

How many hundreds are in this number?

0 8 0 7 0 2

7,285

one hundred sixty-seven



Cross out the words where a makes a different sound than ago.

away asleep angry all ahead
 ant about apple answer
 around aim above asked alive


Write the correct comparative or superlative.

His hair is _____ than mine.
 curly
 Of all the kids, he arrived _____
 early

What might you say when you're afraid? Use quotation marks.

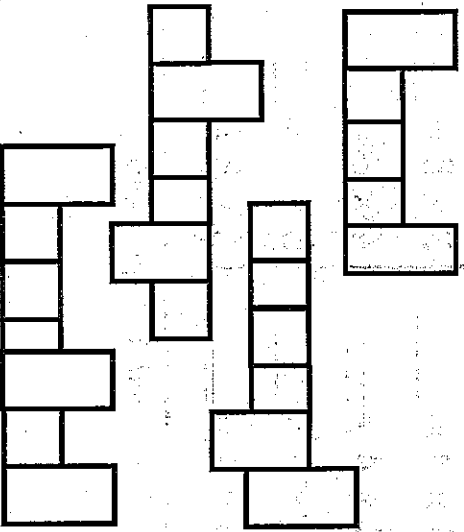
My sentence has:

- correct capitals correct punctuation best try at spelling makes sense



Sight Words

Write each word in the box it fits.
 enough heart change decided



Open a book. Hunt for words to list in each box.

nouns

COMMON

* Proper nouns need capitals!

PROPER

verbs

PAST

PRESENT

FUTURE

pronouns

adjectives

describes nouns

adverbs

describes when, where, or how

My bookmark is 3 times longer than Harper's bookmark. My bookmark is 27 centimeters long. How long is Harper's bookmark?

Solve the problems. If there are more ODD answers than even, color the monster green. If there are more EVEN answers, color him purple.

$$\begin{array}{r} 310 \\ - 249 \\ \hline \end{array}$$

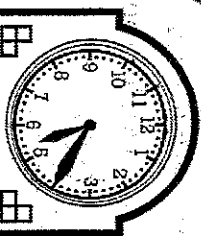
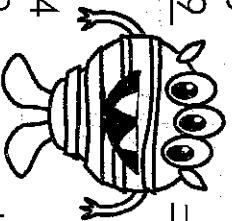
$$762$$

$$- 485$$

$$\begin{array}{r} 104 \\ + 79 \\ \hline \end{array}$$

$$193$$

$$+ 185$$



It's 5:20. Gaspar has been playing in the park for 35 minutes. When did he get to the park?

$$2/3 \bigcirc 1/3$$

$$\bigcirc > \bigcirc < \bigcirc =$$



one hundred sixty-eight

Breakable means able to break.

What does wearable mean?

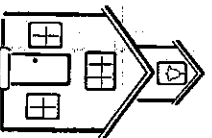
What does excitable mean?

Write the past, present, and future of each verb.			
verb	past	present	future
write			
swim			

last friday we agree to thum wrestle i scid

swim
write
agree

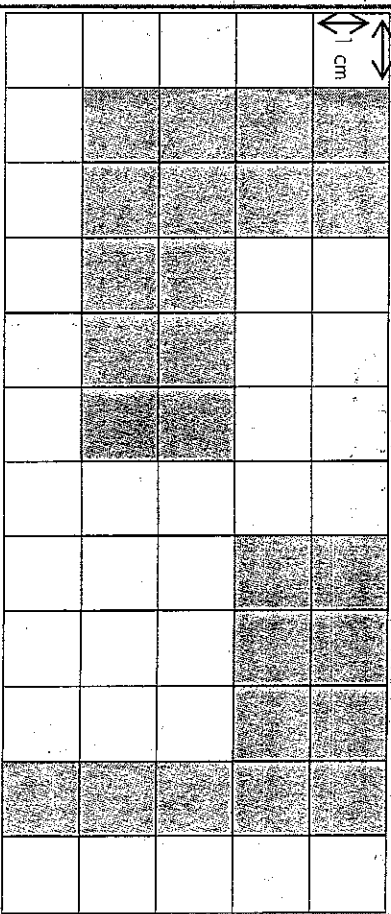
It takes a lot of people to make our school run well, but someone indispensable is...



The Girl Scouts sold 374 boxes of Tagalongs and 558 boxes of Thin Mints. How many boxes of cookies did they sell in all?

area: the measure of space inside a shape

Decompose each figure into 2 rectangles. Find the area of the smaller rectangles. Add to find the area of the larger figure.



area: _____ cm²

area: _____ cm²

Round to the nearest 10.

546 271

712 358

183 465

$7 \times 7 =$ _____
 $70 \times 7 =$ _____
 $2 \times 4 =$ _____
 $20 \times 4 =$ _____
 $3 \times 8 =$ _____
 $30 \times 8 =$ _____

$\div 10 = 5$
 0 15 0 50 0 10

one hundred sixty-nine

Write the words in order from weakest to strongest.
scream talk whisper yell

← weakest → → strongest →

Write a complex sentence.

Introductory clauses or phrases start sentences and need commas. Add commas after each introductory clause/phrase.
 As soon as the oven is hot put in the pizza.
 Deep in space there are lots of stars.

My sentence has:
 correct capitals correct punctuation best try at spelling makes sense

copy

copy

copy

Sight Words


Unscramble the letters.

enough heart change decided

gehnou _____
 gehnac _____
 ddeedci _____
 hrate _____

repeated addition

Show the multiplication fact in 4 different ways.




area

4 x 4

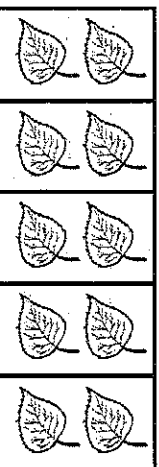
array

picture of sets

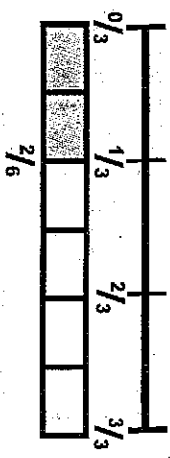
At the state fair, Lorna's pumpkin has a mass of 281 kilograms. It is 354 kilograms less than Savir's pumpkin. What is the mass of Savir's pumpkin?



21 ÷ 3 = _____ 21 ÷ 7 = _____




10 ÷ 5 = _____ 10 ÷ 2 = _____



Two-sixths is:


- exactly $\frac{0}{3}$ exactly $\frac{1}{3}$ exactly $\frac{3}{3}$
 $\frac{1}{3}$ and _____ make $\frac{3}{3}$.



- 1:50 2:50 10:08

one hundred seventy

I can explain the meaning of figurative language.



Luck of the Draw

The classes shuffled into the gym for the assembly and took their seats. Tyrell looked at the other children around him. No one else was excited for an assembly either. Tyrell thought the only good thing about this assembly was that their spelling test would be delayed for a little while longer. The kids quieted down and the principal introduced the guest speaker: a woman named Pam who worked as an illustrator. When Tyrell heard that she did the pictures for his favorite book series, The Adventures of Dino-Bot and Future Man, he sat up a little straighter. Maybe he was interested in this after all. Tyrell listened to Pam talk about storyboards and editors. She shared some sneak peeks of the new Dino-Bot pictures she was drawing. Tyrell leaned forward in his seat to get a better look. Then she asked if anyone had a question. Tyrell's hand shot up first. "How can I become an illustrator when I grow-up?" he asked. Pam told him to draw and write as much as he could and when he got older to take some art classes. Tyrell was so excited he could barely hold still. His fingers were itching to pick up a pencil and do some drawing. Pam finished answering questions and everyone applauded. As the students walked back to class, Tyrell felt lucky to have attended such an amazing assembly.

What does "Tyrell's hand shot up first" mean? What clues helped you figure out the meaning of the phrase?

Whisper read the passage to yourself. Rate your reading fluency.

Accuracy	Pace	Punctuation	Like Talking	Expression
I read the words correctly.	I wasn't too fast, I wasn't too slow.	I paused at the punctuation marks.	I read smoothly, not choppy.	I give the words some feeling.
🍏🍏🍏🍏🍏	🍏🍏🍏🍏🍏	🍏🍏🍏🍏🍏	🍏🍏🍏🍏🍏	🍏🍏🍏🍏🍏

5 apples = perfect 4 apples = pretty good 3 apples = alright 2 apples = I could do better 1 apple = I didn't try

Next time I will work on _____.

one hundred seventy-one



Use the clues in the sentences and write the missing words.

The king loved to have the _____ of everything. His _____ was famous all over the _____.

finest kingdom opulence

Some nouns that end in o...

...make plural by adding es.



Singular: hero



Plural: _____

i believe clarras is the comfyst room Ive seen

clarras

comfyst


rooom

influence

[noun] You have influence

if you can change something or someone.

Draw a picture of the word.



Number of Stars in Constellations

The Big Dipper	☆☆☆☆
Draco	☆☆☆☆☆☆☆☆
The Southern Cross	☆☆
Aquarius	☆☆☆☆☆☆☆☆
Pegasus	☆☆☆☆☆☆

key: ☆ = 2 stars

- The Southern Cross has 6 fewer stars than _____.
- There are _____ stars in all of these constellations.



- This symbol ☆ means: _____
- _____ has 9 stars.
- Big Dipper has _____ stars.

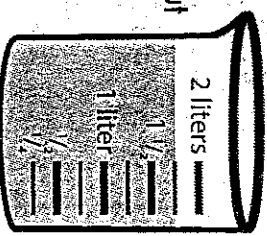
Volume: the space something takes up

My backyard has an area of 60 m². The yard is 6 meters long. How many meters wide is it?

Choose 3-in-a-row to solve.

934	233	736
+115	+507	-552
686	535	751
-499	-285	+377
508	156	1368
+499	-97	-250

There are about _____ liters in the beaker.



- What is the same as:
- 6 hundreds 18 tens
 - 618 ○ 708 ○ 780



one hundred seventy-two

When Grandma said we were going to Disneyland, I was over the moon. I was too excited to even sleep!
What does *over the moon* mean?

Rewrite the sentence to include a plural possessive noun.
Those are the fields of the farmers.

Write a compound sentence:

Roberts

require

reprieve

My sentence has:

- correct capitals correct punctuation best try at spelling makes sense

Sight Words

Write one letter in each box. Spell the words correctly.

hour	since

different

laughed

Break apart each word. Write the suffix and its meaning, the base word, and a simple definition for each word.

word	suffix means	base word	definition
silence	-ence = being	silent	being silent
difference	-ence = being	different	
excellence	-ence = being		
intelligence			
absence			

The fountain in the park gushes 90 liters of water per minute. How many minutes will it take to pump 270 liters of water?

What was the price of a Ford Model-T in 1914?

start

342	-	295	=	

→

	+	687	=	

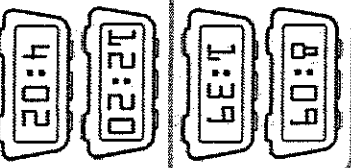
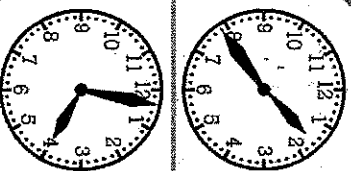
←

	-	403	=	

←

	+	109	=	

dollars



13 dimes, 9 quarters

- \$3.55 \$1.35 \$3.39

one hundred seventy-three

Write **au** or **ou** to finish each word.

l__gh c__gh th__ght

en__gh c__ght n__ghty

Some nouns that end in o...

...make plural by adding es.



Singular: _____



Plural: _____

me and Abe has had enouff of gregs mischeif

me and Abe has had enouff of gregs mischeif

me and Abe has had enouff of gregs mischeif

me and Abe has had enouff of gregs mischeif

Influence

[noun] You have **influence** if you can change something or someone.

Examples or synonyms:

Nonexamples or antonyms:

Write the number in word form:

Write the number in expanded form:

Write 3 number sentences that equal 2548.

2548

Draw the base-10 blocks.

● = 1 | = 10 □ = 100 ▢ = 1000

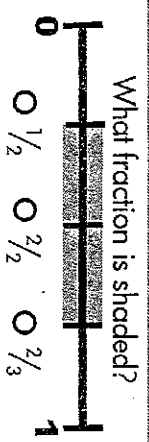
In the library, there were 820 animal books. Some of the books were checked out. The library still has 258 animal books. How many books were checked out?

Color even products orange. Color odd products blue.

° 0x5= — 	° 8x4= — 	° 6x5= —
° 3x4= — 	° 9x6= — 	° 7x2= —

Each necklace has 10 beads. How many necklaces can I make with 634 beads?

10 necklaces fit in a box. How many boxes are needed for all the necklaces?





Use the -ent suffix to make a new word out of the bold words.

Our ideas **differ**.

They are _____.

base word _____ + _____ suffix _____ = _____ new word _____

Add the missing punctuation marks to fix the sentences.

Oh no! The alarm didn't go off. I yelled.

Lou asked Do you want a ride home?

Write a question about someone laughing.

My sentence has:

- correct capitals correct punctuation best try at spelling makes sense

Oh no! The alarm didn't go off. I yelled.

Lou asked Do you want a ride home?

Sight Words

Use a word in the box to complete each sentence.

laughed since different hour

1. It's _____ than mine.
2. I worked _____ lunch.
3. We'll leave in an _____.
4. He _____ at my joke.

For the school fundraiser, the students sold 565 rolls of wrapping paper. Then the teachers bought some. In all, there were 643 rolls of wrapping paper sold. How many did the teachers buy?



a slide

Would you rather be...

Use complete sentences.



a swing

my opinion:




strong reason #1

strong reason #2

strong reason #3

List the fractions in order from smallest to largest. Then partition and shade the squares to show each fraction.

$\frac{1}{8}$ $\frac{1}{6}$ $\frac{1}{4}$

$3 \times 3 = 9$

$9 \div 3 = \underline{\quad}$

$\underline{\quad} \times 4 = 40$

$40 \div 4 = \underline{\quad}$

$9 \times \underline{\quad} = 63$

$63 \div 9 = \underline{\quad}$

$\underline{\quad} \times 6 = 48$

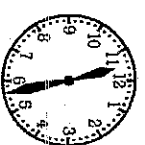
$48 \div 6 = \underline{\quad}$

$1 \times \underline{\quad} = 5$

$5 \div 1 = \underline{\quad}$

$\underline{\quad} \times 2 = 6$

$6 \div 2 = \underline{\quad}$



- 5:57
- 11:30
- 11:28

one hundred seventy-five



I can identify the key details about an individual.

Carter's Tomb

Nothing has focused the world's attention on Egypt more than when Howard Carter discovered King Tut's tomb. When he was only 17 years old, Howard traveled to Egypt from his home in London. His job was to draw copies of tomb decorations. While there, Howard developed a love of Egypt and her history. He set aside art to become an archeologist, someone who studies the past by finding ancient objects. By the early 1900s, most people thought that all the ancient tombs had been discovered, but Howard Carter disagreed. He was certain that one tomb still remained—the tomb of pharaoh, or king, Tutankhamun. Howard dug in the sand for years with no success, but on November 4, 1922 all that changed. Howard Carter's team found the steps leading into the ground. He made a small hole in the corner of the doorway and looked in with a light. When asked if he could see anything, Carter replied, "Yes. Wonderful things!" This was King Tut's tomb, the most well-preserved Egyptian tomb ever found. Howard later worked for collectors and museums, but no discovery could ever match the treasure trove of wealth he found in Egypt on that November day.

Someone

Who is the biography about?

Famous for

What is Howard Carter known for doing?

But

What problems did he have?

Then

How did he deal with his problems?

So

What did he go on to do later?



one hundred seventy-six

diligence [noun] You show **diligence** if you give careful, hard work.
The word *diligence* is connected to learning because...

Some nouns that end in o...
...make plural by adding s.



Singular: _____



Plural: _____

both of his daughters cars has diesel engines

101
101
101

101
101
101

101
101
101

influence

[noun] You have **influence** if you can change something or someone.

What meaning does this word have in your life?
My connection to the word:

Number Line Facts

Show the first fact on top of the number line. Show the second fact on the bottom number line.

$7 \times 4 = 28$



$4 \times 7 = \underline{\hspace{2cm}}$

What do you notice?

An eReader is on sale for \$60. How many can you buy with \$300?

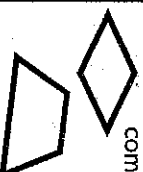
Use the code to write the problem.

Then solve.

	= 345		= 602
	= 497		= 158

	= _____		= _____
--	---------	--	---------

Use some of the words in the box to help compare the shapes.



sides angles
straight parallel

What's the same?

What's different?

What is the standard form of:

$3000 + 400 + 10 + 6$

- 356
- 3,416
- 3,461

one hundred seventy-seven



Cross-out words where ie makes a different sound than field.

friend piece chief pie movie
believe cried sweetie diet
patient shield niece diesel tie

Rewrite the sentence to include a plural possessive noun.

The shrieks of the girls were ear piercing

What might you say when you're surprised? Use quotation marks.

My sentence has:

- correct capitals correct punctuation best try at spelling makes sense

The girls' shrieks were ear piercing.

surprised

wow

what?

Sight Words

Write each word in the box it fits.

believe person break thought

THINK

THINK

THINK

Open a book. Hunt for words to list in each box.

nouns

COMMON

* Proper nouns need capitals!

PROPER

verbs

PAST

PRESENT

FUTURE

pronouns

adjectives

describes nouns

describes adverbs

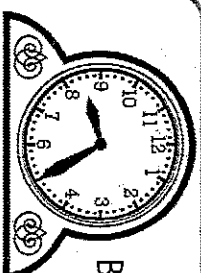

describes when, where, or how

A box of markers has a mass of 80 grams. It has twice as much mass as a box of crayons. What is the mass of the box of crayons?

Solve the problems. If there are more ODD answers than even, color the monster orange. If there are more EVEN answers, color her green.

$$\begin{array}{r} 727 \\ + 273 \\ \hline \end{array}$$

$$\begin{array}{r} 937 \\ - 859 \\ \hline \end{array}$$



It's 8:25. Brownies take 45 minutes to bake. When will the brownies be ready?

$\bigcirc >$ $\bigcirc <$ $\bigcirc =$

$\frac{1}{2}$ $\bigcirc \frac{2}{4}$



one hundred seventy-eight

excellence: being at a high standard or level

His pairings all show an excellent use of color.

What's the shared base word of the underlined words?

Some nouns
that end in o...
...make plural
by adding s.



Singular: _____



Plural: _____

avias coffing was breif but it woke the babbys

avias

coffing

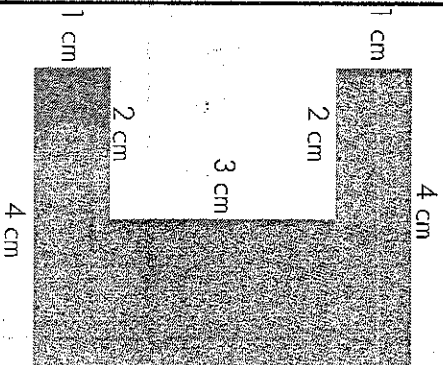
breif

I hope that I can
influence other
people to...




area: the measure of space inside a shape

Decompose each figure into smaller rectangles. Find the area of the smaller rectangles. Add to find the area of the larger figure.



area: _____ cm²



area: _____ cm²

At the bakery, there are 427 doughnuts. 290 of them are glazed and the rest are sprinkled. How many of the doughnuts are sprinkled?

$$2 \times 3 = \underline{\quad}$$

$$20 \times 3 = \underline{\quad}$$

$$5 \times 6 = \underline{\quad}$$

$$50 \times 6 = \underline{\quad}$$

Round to the nearest 10.

291

348

654

106

780

997

$$9 \times 9 = \underline{\quad}$$

$$90 \times 9 = \underline{\quad}$$

$$\square \div 8 = 9$$

0 64 0 17 0 72

one hundred seventy-nine



Write the word that completes the sentence.

nudge shake **jostle**
(touch softly) (shove)

That picture frame is a little bit crooked;
gently _____ it back into place.

Add the missing punctuation marks to fix the sentences.

It's hot out said Mei but I'm chilly.
Could you ride a comet I asked.

Write a complex sentence.

My sentence has:

- correct capitals correct punctuation best try at spelling makes sense

Sight Words

Unscramble the letters.

believe person break thought

eospnr _____

eeelibv _____

ughthto _____

bkare _____

Show the multiplication fact in 4 different ways.



repeated addition

picture of sets

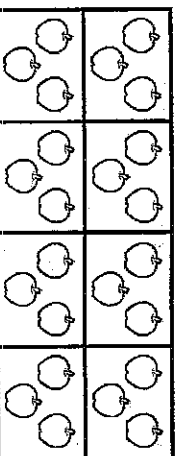
area

4 x 7

array



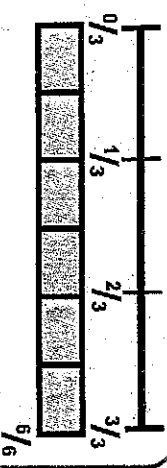
$36 \div 4 = \underline{\quad}$ $36 \div 9 = \underline{\quad}$



$24 \div 8 = \underline{\quad}$ $24 \div 3 = \underline{\quad}$

six-sixths is:

- exactly 0 exactly $\frac{1}{3}$ exactly 1
- $\frac{6}{6}$ and _____ make 1 whole .



- 3:43 4:43 8:20

At the ballpark, 883 liters of soda and 564 liters of water were sold. How many more liters of soda were sold than water?



one hundred eighty

I can use clues to find the meaning of unknown words.

Carter's Tomb

Nothing has focused the world's attention on Egypt more than when Howard Carter discovered King Tut's tomb. When he was only 17 years old, Howard traveled to Egypt from his home in London. His job was to draw copies of tomb decorations. While there, Howard developed a love of Egypt and her history. He set aside art to become an archeologist, someone who studies the past by finding ancient objects. By the early 1900s, most people thought that all the ancient tombs had been discovered, but Howard Carter disagreed. He was certain that one tomb still remained—the tomb of pharaoh, or king, Tutankhamun. Howard dug in the sand for years with no success, but on November 4, 1922 all that changed. Howard Carter's team found the steps leading into the ground. He made a small hole in the corner of the doorway and looked in with a light. When asked if he could see anything, Carter replied, "Yes. Wonderful things!" This was King Tut's tomb, the most well preserved Egyptian tomb ever found. Howard later worked for collectors and museums, but no discovery could ever match the treasure trove of wealth he found in Egypt on that November day.

What does *ancient* mean?



What clues helped you figure it out?

Whisper read the passage to yourself. Rate your reading fluency.

Accuracy I read the words correctly.	Pace I wasn't too fast, I wasn't too slow.	Punctuation I paused at the punctuation marks.	Like Talking I read smoothly, not choppy.	Expression I give the words some feeling.
🍏🍏🍏🍏🍏	🍏🍏🍏🍏🍏	🍏🍏🍏🍏🍏	🍏🍏🍏🍏🍏	🍏🍏🍏🍏🍏

5 apples = perfect 4 apples = pretty good 3 apples = alright 2 apples = I could do better 1 apple = I didn't try

Next time I will work on _____.

↑

Handwritten text, possibly a list or notes, located in the upper left quadrant of the page. The text is extremely faint and illegible.

Small handwritten mark or signature at the bottom center of the page.